



May

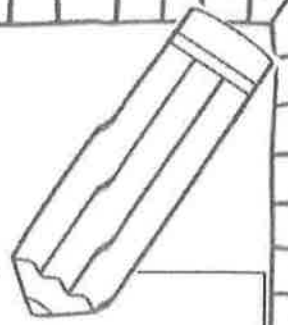


Please assist your child in completing the following activities. Completed homework is due back on the first school day of the next month.

Letters & Sounds: Long e Long u Review	1	2	3	4
	Literacy Skill Review 1	Literacy Skill Review 2	Literacy Skill Review 3	Literacy Skill Review 4
Sight Words: help one look out too review	5	6	7	8
	Math Skill Review 1	Math Skill Review 2	Math Skill Review 3	Math Skill Review 4
	9	10	11	12
	3D Shape Game	Subtraction Slides & Ladders Game	Lego Addition & Subtraction Game	Spell Sight Words outside with Chalk!
Family Project: Plant seeds outside, watch them grow and identify the parts of the Life Cycle!			Challenge Homework: (Optional) Create your own story. Write a beginning, middle and end.	


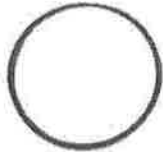

Lit ①

Skill Review!








Name _____

Write the beginning sound.



Write the number of syllables.




Write the missing letter.




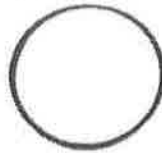
fo__k



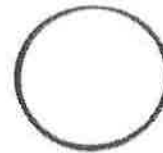
so__a



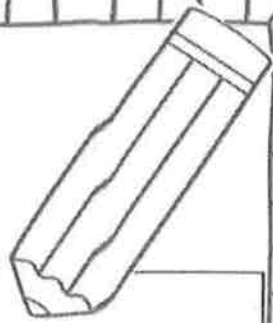
is__and



lo__ster

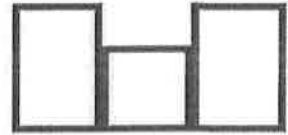
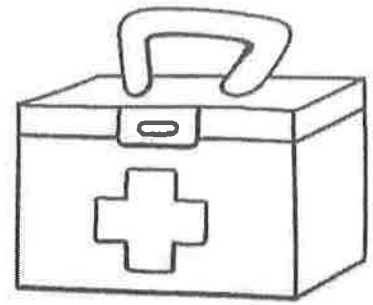

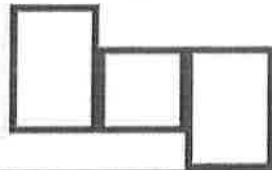




Lit 2 Skill Review!

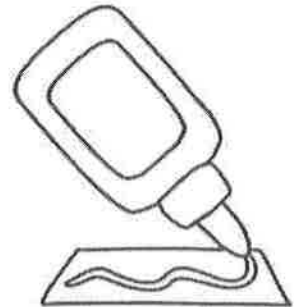
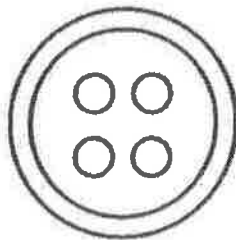



Name _____


Write the words.



Write the number of syllables and circle the pictures that rhyme.



Write the missing letter.




wo__m



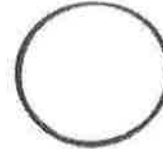
se__en



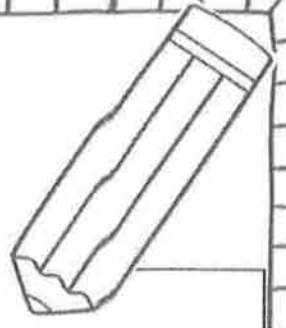
gho__t



sna__e

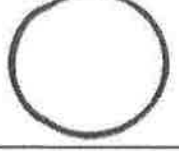
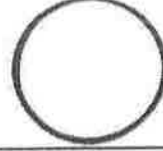






Lit ③ Skill Review!



Name _____

Write the blend b, c, or fl that the picture starts with.



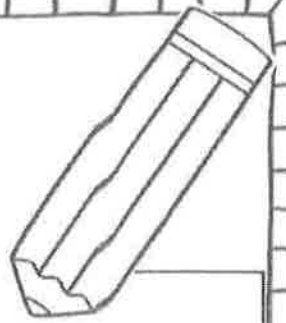
Put the mixed up sentence in order.

--	--	--	--

Write the sentence and draw a picture.




fast.	The	is	fly
-------	-----	----	-----

Skill Review!



Name _____

Write the blend gl, sl, or cl that the picture starts with.



Put the mixed up sentence in order.


--	--	--	--

Write the sentence and draw a picture.

is	clown?	Where	the
----	--------	-------	-----

Name Math Skill Review 1

Count and use tally marks to show how many of each.



Use the data to make a graph.

Write how many.

Draw a picture to show which one had more.

There were five crayons and three pencils. How many altogether?



 ○ =

There were five cupcakes and three cherries. How many more cupcakes than cherries?





 ○ =

Write the missing numerals.


12		
		17
	22	

Write how many tens and ones.

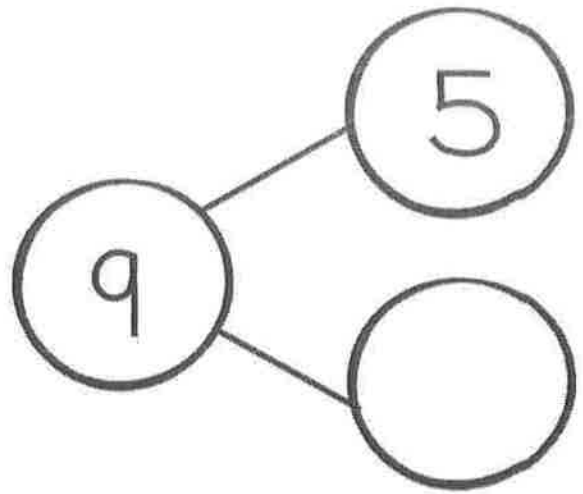


Name Math Skill Review 2

Count and write how many.



Finish the number bond.



Find the sum.

$5 + 2 = \underline{\quad}$

$8 + 2 = \underline{\quad}$

$4 + 6 = \underline{\quad}$

$1 + 5 = \underline{\quad}$




Find the difference.

$5 - 2 = \underline{\quad}$

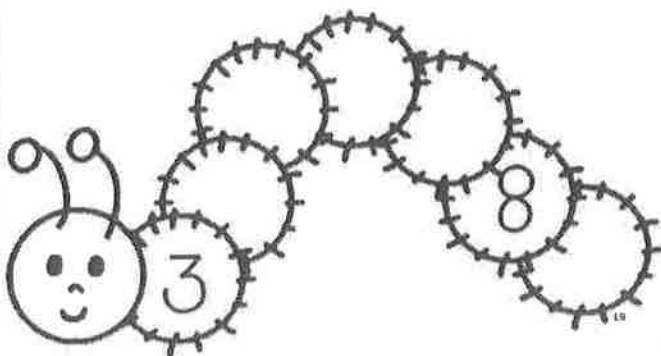
$8 - 2 = \underline{\quad}$

$6 - 4 = \underline{\quad}$


$5 - 1 = \underline{\quad}$



Write the missing numerals.




Write how many tens and ones.

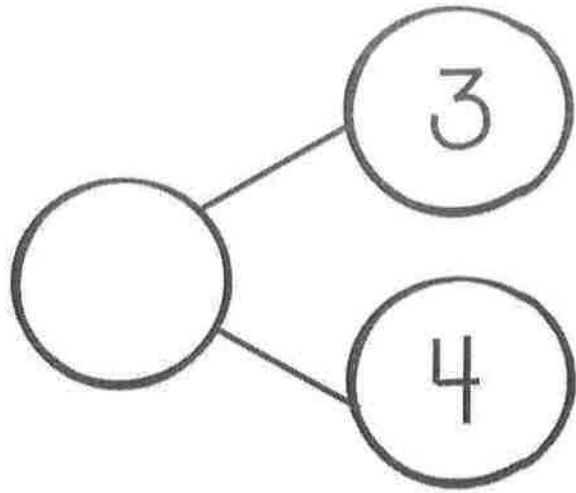


Name Math Skill Review 3

Count and write how many.



Finish the number bond.




Find the sum.

$5 + 5 = \underline{\quad}$

$9 + 3 = \underline{\quad}$

$7 + 4 = \underline{\quad}$

$6 + 5 = \underline{\quad}$




Find the difference.

$5 - 5 = \underline{\quad}$

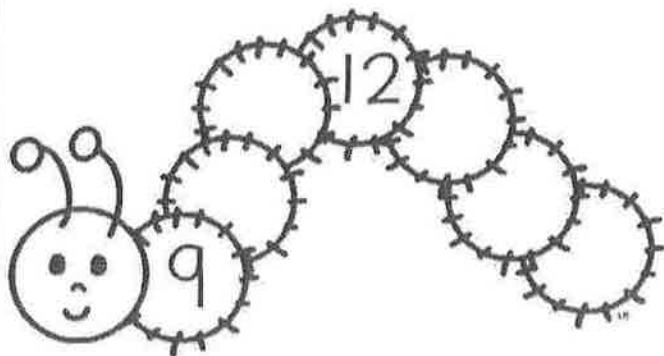
$9 - 3 = \underline{\quad}$

$7 - 4 = \underline{\quad}$

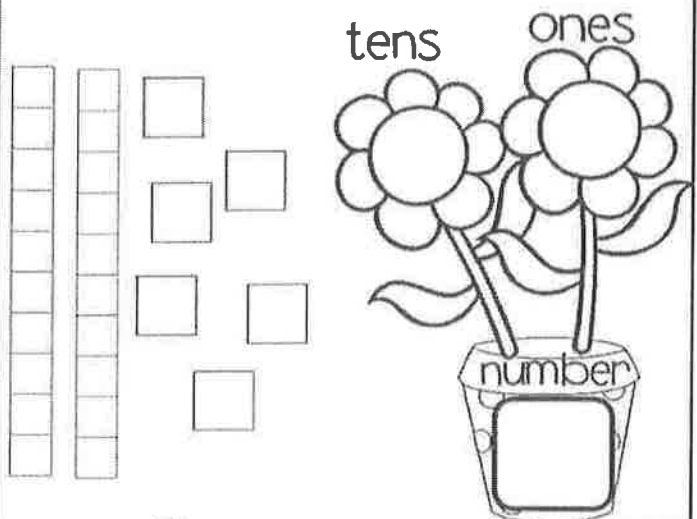
$6 - 5 = \underline{\quad}$



Write the missing numerals.




Write how many tens and ones.

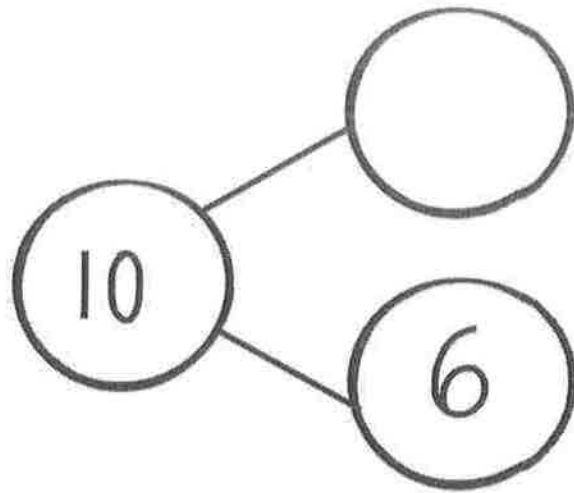


Name Math Skill Review 4

Count and write how many.



Finish the number bond.



Find the sum.

$5 + 5 = \underline{\quad}$

$3 + 3 = \underline{\quad}$

$6 + 6 = \underline{\quad}$

$4 + 4 = \underline{\quad}$



Find the difference.

$9 - 3 = \underline{\quad}$


$10 - 4 = \underline{\quad}$

$7 - 3 = \underline{\quad}$


$8 - 6 = \underline{\quad}$



Write the missing numerals.

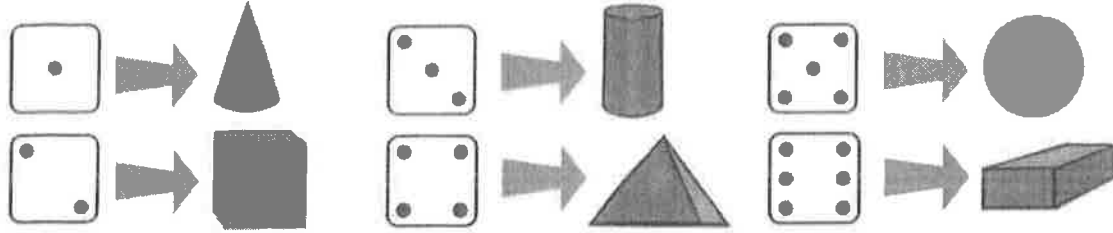


Write how many tens and ones.



Roll a 3D shape

Directions:
 Roll the die. Check the key at the top of the game board. Move your piece to the closest picture that is the same shape. The first to the last square, wins!



Start

SLIDES AND LADDERS

Subtraction with 5

Directions: Roll a die. Move your marker that many spaces. Find the difference. If you are correct, you can stay. If you are not correct, move back. If you land on a ladder, climb up. If you land on a slide, slide down. The first one to the end is the winner.



	28	27	26	25
END	12-5	10-5	13-5	9-5
20	21	22	23	24
9-5	11-5	7-5	5-5	14-5
19	18	17	16	15
12-5	13-5	6-5	7-5	15-5
10	11	12	13	14
5-5	14-5	8-5	10-5	12-5
9	8	7	6	5
11-5	15-5	7-5	9-5	11-5
START	1	2	3	4
	6-5	10-5	13-5	8-5


Addition and Subtraction

Playdough to Plato.

A maze-shaped path for a math game. The path is composed of several interconnected segments, each containing a number. The path starts at a 'START' label at the bottom right and ends at an 'END' label at the top left. There are four playdough pieces scattered around the path, each with a different number of studs (3, 4, 5, and 6). The numbers in the path segments are: -3, +5, -4, +2, -1, +5, +0, -3, -1, +2, -3, +5, -3, -4, -1, +5, -2, +1, +5, -1, -2, +0, -2, +1, -4, -5, +3, -4, -2.

Name: BONUS ☺

SIGHT WORD SEARCH!

w	e	k	y	e	k	n	o	w
s	e	w	h	a	t	a	n	h
j	b	p	c	n	g	t	o	n
h	m	y	b	o	d	l	m	c
c	r	t	c	q	m	i	l	a
h	i	b	t	a	r	e	s	n
f	h	r	r	y	e	n	e	b
w	o	b	e	o	g	w		
s	w	a	l	u	i	i		
z	n	b	v	c	t	t		
a	r	e	s	d	f	h		

to	can	we	come
with	my	you	what
are	how	is	now



A series of ten horizontal lines for writing, arranged in five pairs. Each pair of lines is separated by a small gap. The lines are evenly spaced and extend across most of the page width.



Name _____

May

Color one flower each night you read

